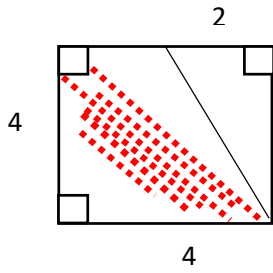
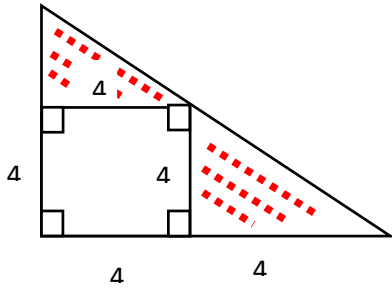


Geometry Area Detail

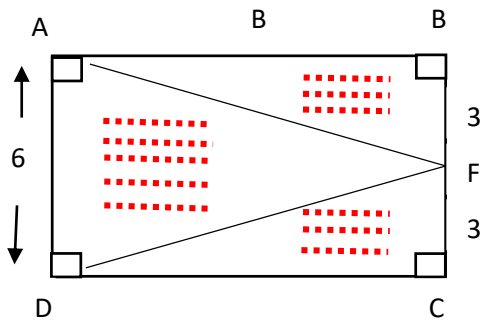


Square

Find the Area of the (red) trapezoid



Calculate the Area of the 2 triangles



ABCD rectangular

Find the Area of

$$\triangle ABF = ?$$

$$\triangle DCF = ?$$

$$\triangle ADF = ?$$