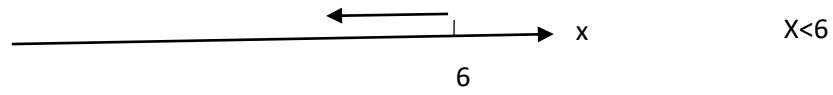


$$\underline{a < x < b}$$

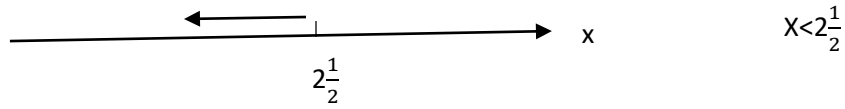
$x < 6$  all the Numbers smaller than 6

ex :  $1, 0, -5, \frac{1}{2}, \pi, \sqrt{2}, -, \frac{1}{3}, -10$

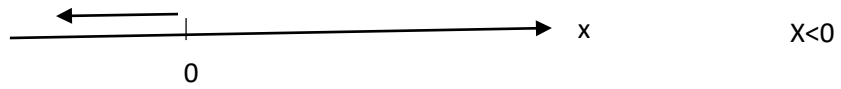
$x > 3$  , Numbers bigger than 3



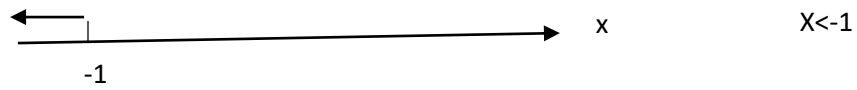
$$x < 6$$



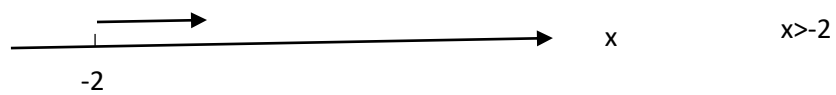
$$x < 2\frac{1}{2}$$



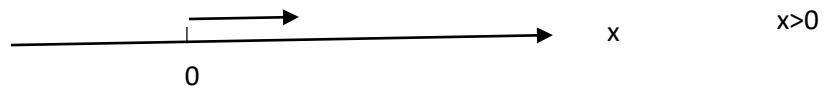
$$x < 0$$



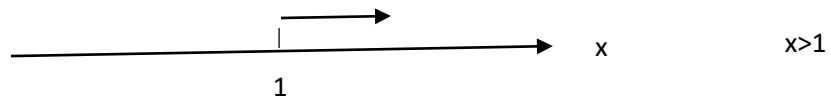
$$x < -1$$



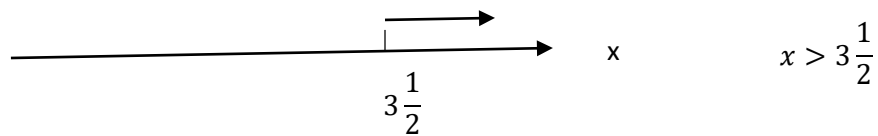
$$x > -2$$



$$x > 0$$



$$x > 1$$



$$x > 3\frac{1}{2}$$